



# Preeschool Monthly Problem




Find Me!



I am a means of transportation.  
I do not move through the air.  
I move to the right.  
I do not move through the water.  
I have four tires.  
Where am I?

# Primary Monthly Problem

## Christmas Cookies



A box of Christmas cookies contains 24 units.  
On one of the days of the novena, three children opened the box and began to enjoy them.  
Alba, who doesn't like sugar very much, ate some cookies. Rocio ate twice as many cookies as Alba did. Jorge, the greediest of the three, ate twice as many cookies as Rocío did.  
If there are three cookies left in the box, how many cookies did each one eat?

# Secondary Monthly Problem

## Rectangles



Two  $80\text{ cm} \times 60\text{ cm}$  rectangles overlap as shown in the figure.

Determine which area is larger:  
that of triangle  $\triangle ACI$  or that of  
quadrilateral  $FGHI$ ?

