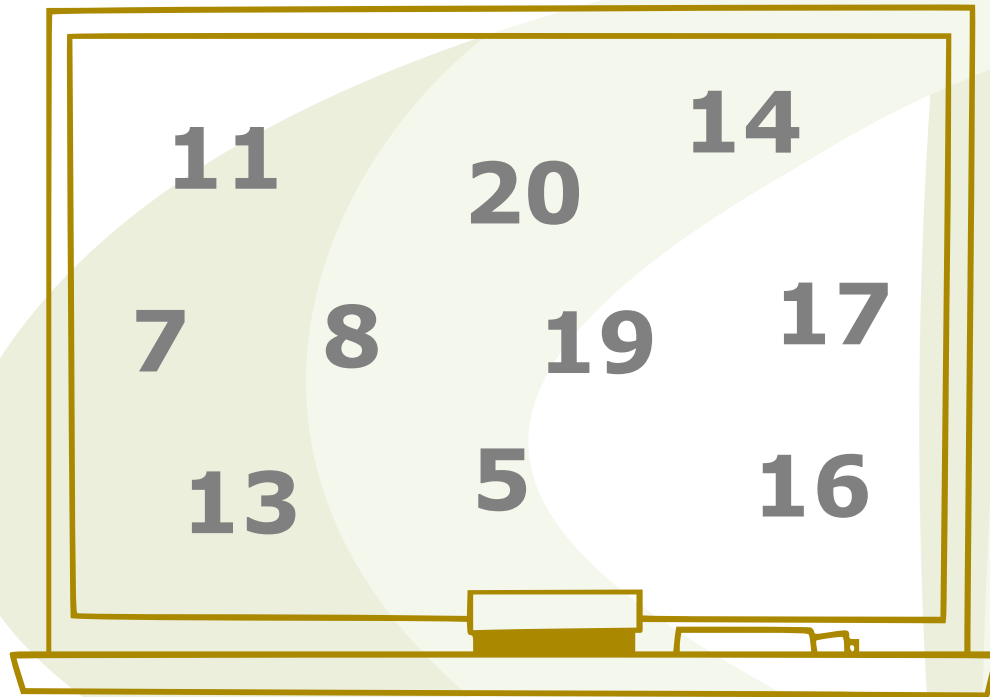




Preschool Monthly Problem

Numbers




- Enclose with a triangle the smallest even number.
- Enclose with a circle the largest odd number.
- Enclose with a square the number that equals $10 - 5$.
- Enclose with a rectangle the number that is equal to twice 7.
- Enclose with a rhombus the number that is equal to $4 + 4 + 4 + 4 + 4$.



Primary Monthly Problem


Corral



In a corral we can enclose either **180** cows or **300** calves.

Today there are **120** cows in this corral.

How many calves can we enclose so that the corral is fully occupied?



Secondary Monthly Problem

Quadrilateral



Determine the perimeter and area of the quadrilateral **ABCD**.

